

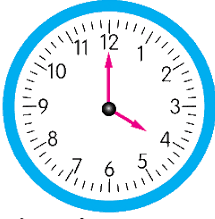


ZAMANI ÖLÇME

AKLIMDA!



Dijital saat



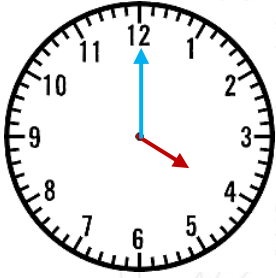
Analog saat

Zamanı saat ile ölçeriz. Günlük hayatımızda analog ve dijital saat kullanırız.

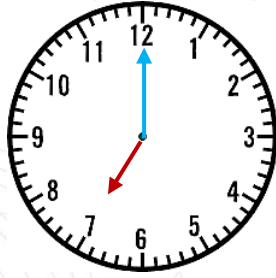
Analog saatte küçük kol **akrep**, büyük kol **yelkovan** olarak adlandırılır.

Yelkovan 12'nin üzerindeyken tam saatleri, 6'nın üzerindeyken yarım saatleri gösterir.

Etkinlik: Aşağıdaki saatlerin kaçı gösterdiğini altlarına yazalım.



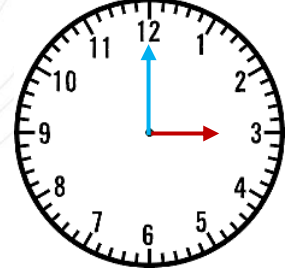
.....



.....



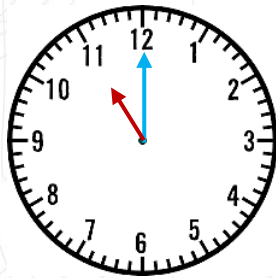
.....



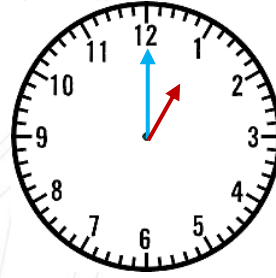
.....



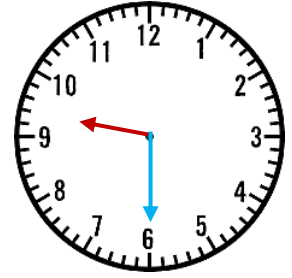
.....



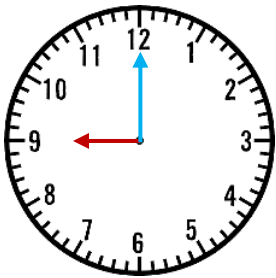
.....



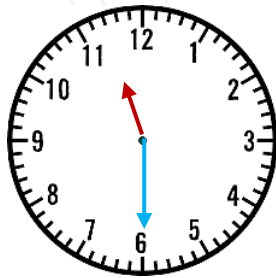
.....



.....



.....



.....




.....




.....


Etkinlik: Okunuşları verilen saatlerin akrep ve yelkovanlarını çizelim.



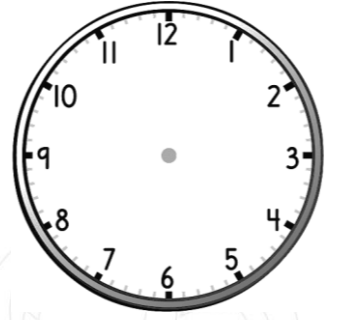
Saat 9




Saat 11




Saat 7 buçuk



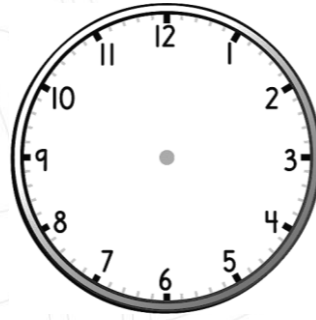
Saat 3



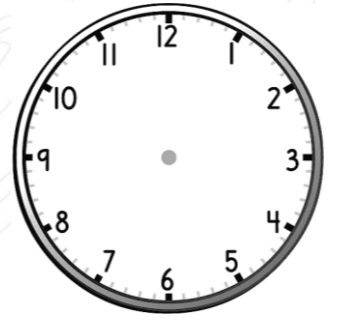
Saat 10




Saat 12 buçuk




Saat 7




Saat 2 buçuk



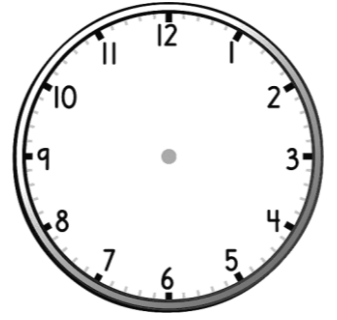
Saat 10 buçuk



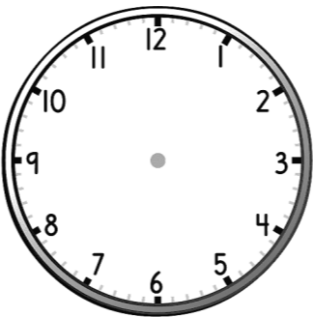
Saat 5




Saat 8




Saat 4 buçuk



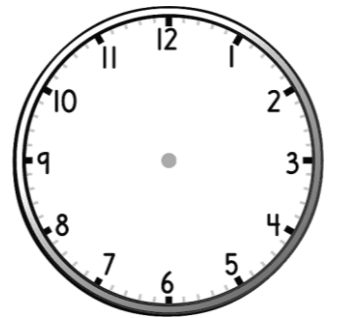
Saat 6



Saat 4



Saat 5 buçuk



Saat 9 buçuk

AKLIMDA!

Yelkovan 3'ün üzerindeyken "çeyrek geçiyor" ifadesini kullanırız. Yelkovan 9'un üzerindeyken "çeyrek var" ifadesini kullanırız.

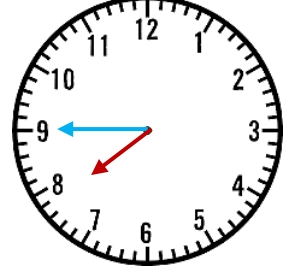
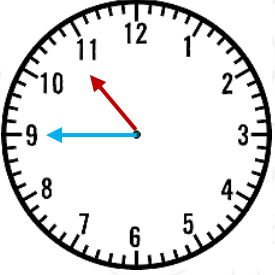
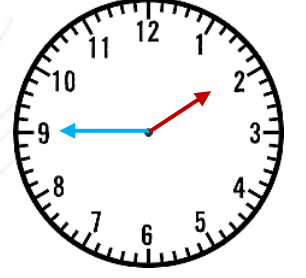
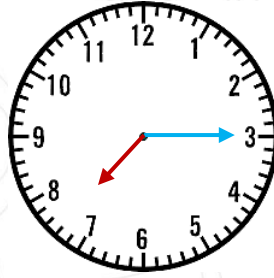


12'yi çeyrek geçiyor.

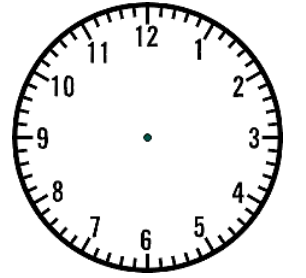
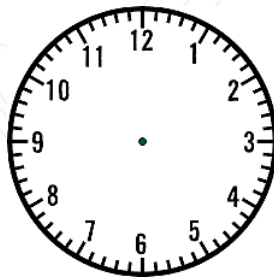
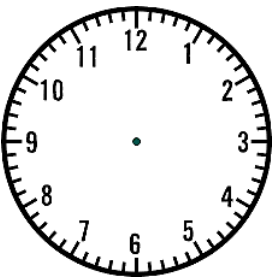


12'ye çeyrek var.

Etkinlik: Aşağıdaki saatlerin kaç gösterdiğini altlarına yazalım.



Etkinlik: Okunuşları verilen saatlerin akrep ve yelkovanlarını çizelim.




5'i çeyrek geçiyor.


Saat 4'e çeyrek var

Saat 9'u çeyrek geçiyor.


Etkinlik: Aşağıdaki saatlerin öğleden önce kaç gösterdiğini yazalım.




08.30




09.15




10.45




07.00




11.15



06.00




05.30




04.45


Etkinlik: Aşağıdaki saatlerin öğleden sonra kaç gösterdiğini yazalım.




13.00




15.45




20.30




22.15




18.00



16.30



14.15



19.45