




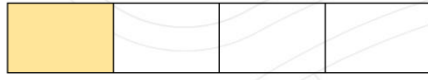
AKLIMDA!

Payı 1 olan basit kesirlere birim kesir denir. Birim kesirlerde karşılaştırma ve sıralama yaparken kesrin paydasına bakılır. Paydası küçük olan birim kesir daha büyük, paydası büyük olan birim kesir daha küçüktür.



$$\frac{1}{2}$$

$$\frac{1}{2} > \frac{1}{4}$$



$$\frac{1}{4}$$




Aşağıdaki kesir ifadelerine göre şekilleri boyyalım.

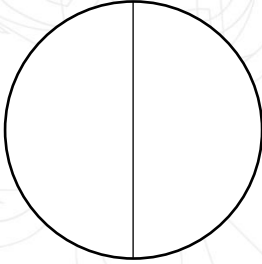
$$\frac{1}{6}$$



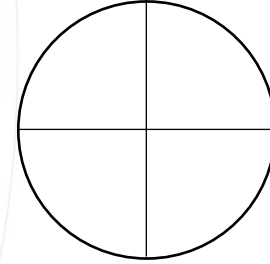
$$\frac{1}{8}$$



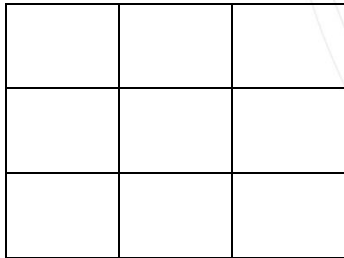
$$\frac{1}{2}$$



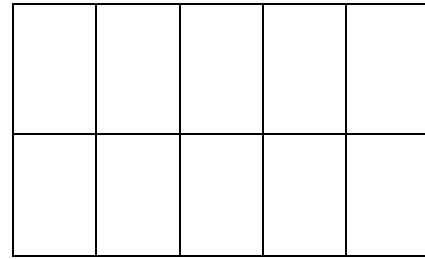
$$\frac{1}{4}$$




$$\frac{1}{9}$$



$$\frac{1}{10}$$



$$\frac{1}{7}$$



$$\frac{1}{3}$$





Aşağıda verilen birim kesirlerden büyük olanı işaretleyelim.

$\frac{1}{4}$	$\frac{1}{7}$
<input type="checkbox"/>	<input type="checkbox"/>

$\frac{1}{2}$	$\frac{1}{5}$
<input type="checkbox"/>	<input type="checkbox"/>

$\frac{1}{8}$	$\frac{1}{3}$
<input type="checkbox"/>	<input type="checkbox"/>



Aşağıda verilen birim kesirlerden küçük olanı işaretleyelim.

$\frac{1}{10}$	$\frac{1}{7}$
<input type="checkbox"/>	<input type="checkbox"/>

$\frac{1}{9}$	$\frac{1}{13}$
<input type="checkbox"/>	<input type="checkbox"/>

$\frac{1}{6}$	$\frac{1}{11}$
<input type="checkbox"/>	<input type="checkbox"/>



Aşağıda verilen birim kesirleri büyükten küçüğe sembol kullanarak sıralayalım.

$\frac{1}{7}$ $\frac{1}{3}$ $\frac{1}{5}$ $\frac{1}{2}$



....
...

$\frac{1}{6}$ $\frac{1}{9}$ $\frac{1}{4}$ $\frac{1}{8}$



....
...

$\frac{1}{13}$ $\frac{1}{7}$ $\frac{1}{9}$ $\frac{1}{14}$



....
...



Aşağıda verilen birim kesirleri küçükten büyüğe sembol kullanarak sıralayalım.

$\frac{1}{6}$ $\frac{1}{2}$ $\frac{1}{8}$ $\frac{1}{10}$



....
...

$\frac{1}{5}$ $\frac{1}{7}$ $\frac{1}{3}$ $\frac{1}{9}$



....
...

$\frac{1}{11}$ $\frac{1}{10}$ $\frac{1}{15}$ $\frac{1}{12}$



....
...